

RDCS423 Tutorial Problems and Solutions #2 - Time Handling

1. A *master-slave clock algorithm* was used to synchronize a slave processor clock. At the start of the update cycle the master clock had a time of 10:00:00.000000 and the slave received the master's clock after 10 μ sec at its clock time of 10:00:00.000500. In the second phase of the update cycle, the slave responds with a time of 10:00:00.001000 which is transmitted to the master in 30 μ sec where the master clock reads 10:00:00.000540. Assuming that nothing is known about the slave clock errors apart from the assumption of a zero-mean Gaussian distribution, what is the clock update that would be sent from the master to the slave?

2. With a *master-slave clock algorithm*, show that a bound on the maximal clock error between slaves would be given by the following expression:

$$\left| 2\tau \max_j(\delta_j) \right| + \left| 2 \max_j(\epsilon_j) \right|$$

where $j = 1 \dots$ number of slaves

$\delta_j =$ the drift rate (in sec/sec) for slave j

$$\epsilon_j = (\bar{\mu}_i^j - \bar{\mu}_j^i)/2 - (\bar{E}_j^1 - \bar{E}_j^2)/2$$

$\tau =$ update period (sec)

$\bar{\mu}_i^j, \bar{\mu}_j^i =$ mean master-slave and slave-master communication times respectively

$\bar{E}_j^1, \bar{E}_j^2 =$ mean slave clock error distribution times

3. Given a *fundamental ordering distributed clock algorithm*, develop a bound for the variation of each clock in a distributed network with a communication graph of diameter d . Calculate this bound for a case with a clock drift rate of 0.001, message update rate of 10 msec, upper bound on message delays of 10 μ sec, and a communication graph diameter of 10 hops.

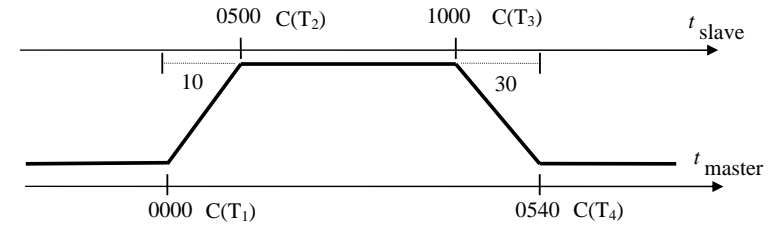
4. With a *distributed clock algorithm* that uses a *minimize maximum error approach*, determine what clock update is performed from node j given the following states at node i and node j at the time of the update cycle:

At node i : let the reset time be 00:00:00.000000, the count time is 00:00:00.001000, the drift rate is estimated at 0.01, and the estimated discretization error is 5 μ sec.

At node j : let the reset time be 00:00:00.000000, the count time is 00:00:00.001020, the drift rate is estimated at 0.01, and the estimated discretization error is 20 μ sec. The response delay from node i to node j is 5 μ sec.

Solutions:

1.



- slave computes $d_1 = C(T_2) - C(T_1) = 500$ and sends to master
- master computes $d_2 = C(T_4) - C(T_3) = -460$
- master computes slave clock skew $\xi_1 = (d_1 - d_2)/2 - (\mu_i^j - \mu_j^i)/2 + (E_j^1 - E_j^2)/2$
 $= [500 - (-460)]/2 - [10-30]/2$
 $= 490 \mu\text{sec}$
- the slave clock skew is sent to the slave for update

2. In the first instance assume no drift and recall that:

$$(d_1 - d_2)/2 = \xi_j + (\mu_i^j - \mu_j^i)/2 - (E_j^1 - E_j^2)/2$$

Now each slave introduces an error via the update algorithm and if this error is

$$\epsilon_j = (\mu_i^j - \mu_j^i)/2 - (E_j^1 - E_j^2)/2 = (d_1 - d_2)/2$$

then $\xi_j = 0$ and the clock skew is found to be zero \rightarrow this error cannot be removed if (worst case) this is maintained on each successive cycle. For a number of cycles this residual error is:

$$\epsilon_j = (\bar{\mu}_i^j - \bar{\mu}_j^i)/2 - (\bar{E}_j^1 - \bar{E}_j^2)/2$$

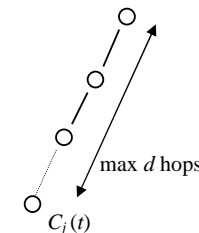
Because each slave may have a persistent error ranging from $|\epsilon_j|$ to $-|\epsilon_j|$ with respect to the master, the maximal clock difference between slaves is $\left| 2 \max_j(\epsilon_j) \right|$.

With the drift term δ_j included, in an interval τ , the error introduced is just $\tau\delta_j$. As the drift can range from $|\delta_j|$ to $-|\delta_j|$ with respect to the master \rightarrow the maximal clock difference between slaves due to drift is $\left| 2\tau \max_j(\delta_j) \right|$.

Combine the terms to give the maximal clock error between slaves:

$$\left| 2\tau \max_j(\delta_j) \right| + \left| 2 \max_j(\epsilon_j) \right|$$

3.



- Clock drift rate is δ
- Message update rate is τ
- Message delay: $\mu < D < \eta$
- Communication graph max distance is d
- Between any two nodes we have a worst case drift in τ seconds of $2\delta\tau$ seconds.

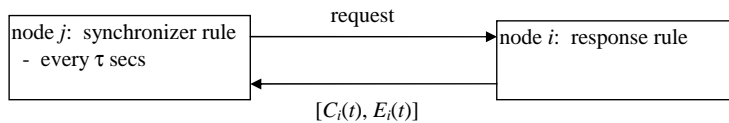
Within a message update interval clocks could have drifted apart by $2\delta\tau$. With the worst communications delay of η seconds the error between directly connected nodes is then $2\delta\tau + \eta$

Also worst case, a sequence of updates must traverse d hops incurring an error of $2\delta\tau + \eta$ on each step \rightarrow the bound on correctness of any two clocks in this network is:

$$\forall i \forall j: |C_i(t) - C_j(t)| < d(2\delta\tau + \eta)$$

with $\delta = 0.001$, $\tau = 0.01$, $\eta = 10^{-5}$, $d = 10 \rightarrow |C_i(t) - C_j(t)| < 300 \mu\text{secs}$

4.



Response from node i : after request from node j

$$E_i(t) = \epsilon_i + [C_i(t) - \rho_i] \delta_i = 5 + (1000)0.01 = 15 \mu\text{s}$$

Send $[C_i(t), E_i(t)] = [00:00:00.001000, 15]$ to node j

Synchronizer at node j :

Receive $[C_i(t), E_i(t)]$ from node i

$$E_j(t) = \epsilon_j + [C_j(t) - \rho_j] \delta_j = 20 + (1020)0.01 = 30.2 \mu\text{s}$$

$$\rightarrow [C_j(t) - E_j(t), C_j(t) + E_j(t)] = [00:00:00.0009988, 00:00:00.0010502]$$

$$[C_i(t) - E_i(t), C_i(t) + E_i(t)] = [00:00:00.000985, 00:00:00.001015]$$

which clearly has a non-empty intersection interval

$$\text{and } E_i(t) + (1+\delta_i)\mu_i^j = 15 + (1+0.01)5 = 20.05 \leq E_j(t)$$

\rightarrow both conditions to use the time from node i are met so the synchronizer at node j will reset its clock, update the error and reset time:

$$C_j(t) \leftarrow C_i(t) = 00:00:00.001000$$

$$\epsilon_j \leftarrow E_i(t) + (1+\delta_i)\mu_i^j = 20.05 \mu\text{s}$$

$$\rho_j \leftarrow C_i(t) = 00:00:00.001000$$